

GEOGRAPHY PAPER II 2006
Answer all the questions in this section
SECTION A

1. (a) Differentiate between transport and communication (2 mks)
(b) State three causes of the decline in the use of letter writing as means of communication in Kenya (3 mks)
- (a) Give two methods used to reclaim land in Kenya (2 mks)
(b) Outline the stages through which land is reclaimed from the sea in the Netherlands (3 mks)
3. The table below represents information on population change in Kenya by province between years 2000 and 2005

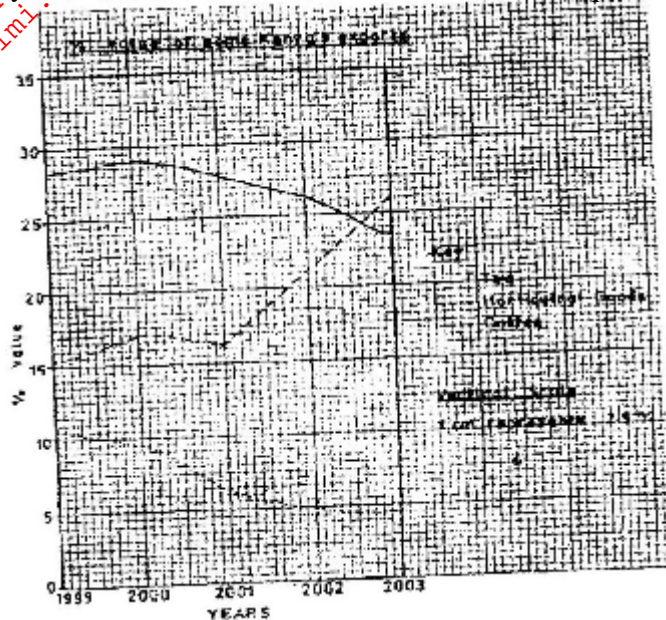
Province	Population in Millions	
	Years	
	2000	2005
Nairobi	2.229	2.751
Central	3.882	4.038
Coast	2.662	2.927
Eastern	4.840	5.120
North- Eastern	1.054	1.438
Nyanza	4.598	4.916
Rift valley	7.386	8.366
Western	5.532	3.885
Total	30.183	33.441

- (a) Which province had the highest change in population between 2000 and 2005? (2mks)
(b) Calculate the percentage increase in population in Kenya between 2000 and 2005 (2mks)
4. (a) state three physical conditions that are necessary for the growing of cocoa (3mks)
(b) Give three economic problems experienced in cocoa farming in Ghana (3mks)
5. (a) State two reasons why some industries are located near the sources of raw materials (2mks)
(b) Give three characteristics of the cottage industry in India (3mks)

SECTION B

Answer question 6 and any other two questions from this section

6. The graph below shows percentage value of some export commodities from Kenya between 1999 and 2003. Use it to answer questions (a) and (b)



- (a)
- (i) What was the percentage value of the tea exported in the year 2000? (2mks)
 - (ii) What was the difference in the percentage values of the horticultural products and coffee exports in 1999? (2mks)
 - (iii) Describe the trend of the value of coffee exports from 1999 to 2003 (3mks)
 - (iv) Explain three factors which may have led to the increased export earnings from horticultural produce in Kenya between years 1999 and 2003 (6mks)
 - (v) Give three advantages of using simple line graphs to represent data. (3mks)
- (b) State four reasons why Kenya's agricultural export earnings are generally low (4mks)
- (c) State five reasons why the common market for Eastern and southern Africa (5mks)

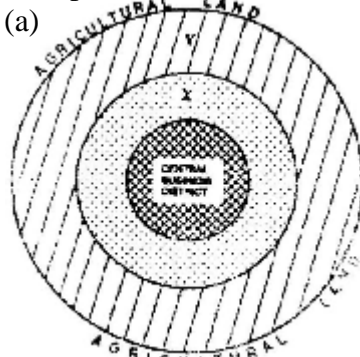
7. Use the map of East Africa below to answer question (a) (i)



- (a) (i) Name the national parks marked P, Q, and R (3 mks)

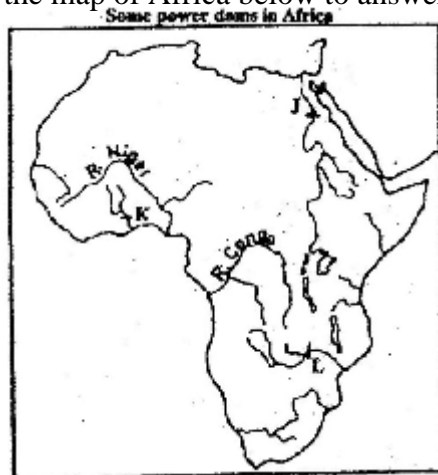
- (ii) Explain the difference between the tourist attractions in East Africa and Switzerland under the following sub-headings.
- Climate (2mks)
 - Culture (2mks)
- (b) Explain five benefits that Kenya derives from tourism
- (c) Explain four measures that Kenya should take in order to attract more tourists (8mks)

The diagram below represents the functional zones of urban centre. Use it to answer question (a)



- (a) Name the zones marked x and y
- (ii) List three functions of the central Business District (3mks)
- (iii) State two ways in which the residents of the zone labeled AGRICULTURAL LAND benefit from the urban centre (2mks)
- (b) State four factors that contribute to the emergence of slums in urban centers (4mks)
- (c) Explain the measures that could be taken to control the following problems in urban centers in Kenya
- (i) High rate of crime (2mks)
 - (ii) water pollution (2mks)
- (d) Explain five factors that led to the growth of Kisumu town (10ms)

9. Use the map of Africa below to answer question (a) (i)



- (a) (i) Name the power dams marked J, K and L (3mks)

- (ii) Explain four ways in which Kenya has benefited from the development of the seven forks hydro- electric power scheme. (8mks)
- (b) (i) Apart from oil, name two other non-renewable sources of energy (2mks)
(ii) Explain four effects that the increase in oil prices has had on the economies of the oil- importing countries of Africa. (8mks)
- (c) State four ways in which Kenya reduce the use of petroleum as a source of energy (4mks)
10. (a) (i) Define the tem fisheries (2mks)
(ii) Name two countries in Southern Africa that are important for marine fish production (2mks)
- (b) Explain four factors that favour the fishing industry in Japan (8mks)
- (c) Describe purse seining as a method of fishing (6mks)
- (d) (i) state four problems experienced in the marketing of fish in Kenya (4mks)
(ii) State three ways in which the Kenya Government is promoting the fishing industry in the country (3mks)